



Complète.




$3 + 3 = \dots\dots$

Le double de 3, c'est




$5 + 5 = \dots\dots$

Le double de 5, c'est




$4 + 4 = \dots\dots$

Le double de 4, c'est



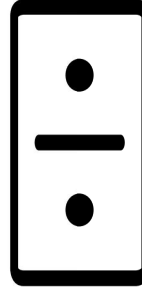
$6 + 6 = \dots\dots$

Le double de 6, c'est



$2 + 2 = \dots\dots$

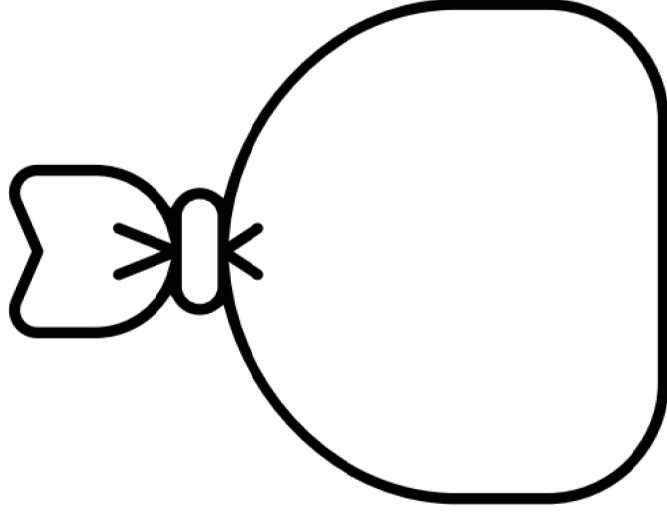
Le double de 2, c'est



$1 + 1 = \dots\dots$

Le double de 1, c'est

Sami a 8 billes. Lola en a le double.
Combien de billes a Lola? Dessine-les.



Lola a billes.

Écris le double de chaque nombre.

2 → 4 →



4 →

8 →

6 →

5 →

9 →

1 →

10 →

7 →