


Prénom :




Calcul automatisé : la multiplication


Propriétés


Ecris le nombre d'objets de plusieurs façons.

| | |
|---|-------------|
|  | × |
| | × |

| | |
|--|-------------|
|  | × |
| | × |

| | |
|---|-------------|
|  | × |
| | × |


| | |
|--|-------------|
|  | × |
| | × |

| | |
|--|-------------|
|  | × |
| | × |


| | |
|---|-------------|
|  | × |
| | × |

Colorie.


$$3 \times 8$$



$$5 \times 7$$



$$4 \times 9$$



Ecris les additions sous forme de multiplication.

$$9 + 9 + 9 + 9 + 9 + 9 = \dots \times \dots$$

$$6 + 6 + 6 + 6 + 6 = \dots \times \dots$$

$$5 + 5 + 5 + 5 + 5 + 5 + 5 + 5 + 5 + 5 = \dots \times \dots$$

$$2 + 2 + 2 + 2 + 2 + 2 + 2 + 2 = \dots \times \dots$$

Ecris sous forme de multiplications.

... × ... = ... × ...

... × ... =
... × ...

... × ... = ... × ...

... × ... =
... × ...

... × ... =
... × ...

... × ...
=

... × ... =
... × ...

... × ... =
... × ...

... × ... = ... × ...

Ecris sous forme d'additions.

$2 \times 9 =$

$7 \times 4 =$

$6 \times 5 =$

$4 \times 8 =$